

Geometry

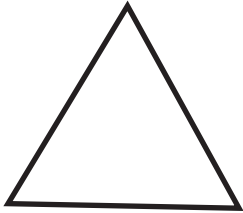
Name : Class :

Score :

Curves: Closed - Open Curves

Are the following closed or open curves ?

1)



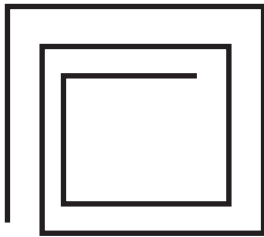
.....

2)




.....

3)



.....

4)



.....

5)



.....

Geometry

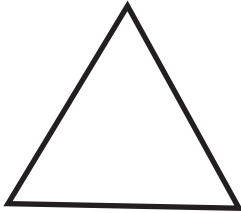
Name : Class :

Score :

Answers for Curves: Closed - Open Curves

Are the following closed or open curves ?

1)



Closed

.....

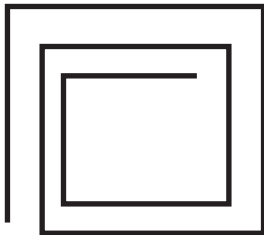
2)



Open

.....


3)



Open

.....

4)



Closed

.....

5)



Closed

.....