

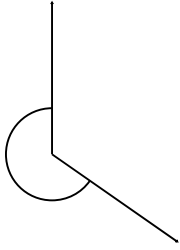
Name: _____

Class: _____

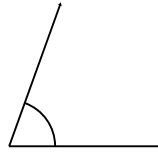
ANGLES

Classify and measure the angles.


1.



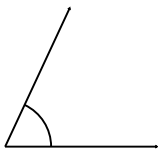
2.




3.



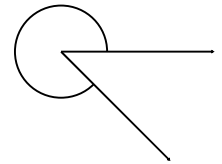
4.



5.



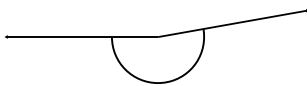
6.



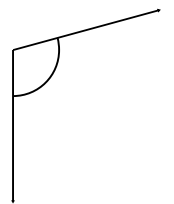
7.



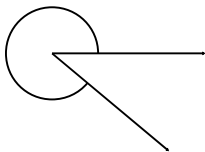
8.



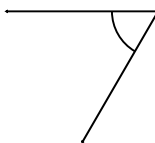
9.



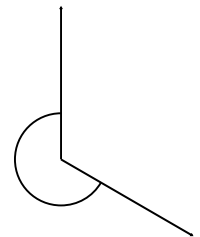
10.



11.



12.



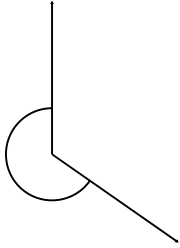
Name: _____

Class: _____

ANGLES

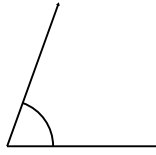
Classify and measure the angles.

1.




235° Reflex

2.



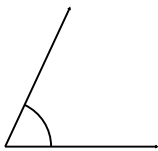
70° Acute

3.




315° Reflex

4.



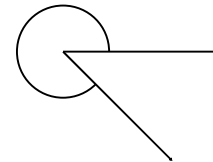
65° Acute

5.



20° Acute

6.



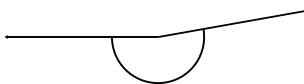
315° Reflex

7.



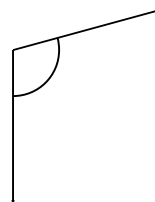
150° Obtuse

8.



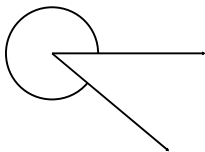
190° Reflex

9.



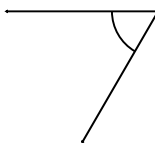
105° Obtuse

10.



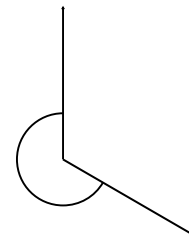
320° Reflex

11.



60° Acute

12.



240° Reflex