

Fractions




Name : Class :

Score :

Half - Thirds - Quarters

Which expression best suits the following divisions?

Tick the correct answer

	$1/2 = \text{half}$ <input type="checkbox"/>
	$1/3 = \text{one third}$ <input type="checkbox"/>
	$1/4 = \text{one quarter}$ <input type="checkbox"/>
	$1/2 = \text{half}$ <input type="checkbox"/>
	$1/3 = \text{one third}$ <input type="checkbox"/>
	$1/4 = \text{one quarter}$ <input type="checkbox"/>
	$1/2 = \text{half}$ <input type="checkbox"/>
	$1/3 = \text{one third}$ <input type="checkbox"/>
	$1/4 = \text{one quarter}$ <input type="checkbox"/>

Fractions




Name : Class :

Score :

Half - Thirds - Quarters

Which expression best suits the following divisions?

Tick the correct answer

	$1/2 = \text{half}$ <input checked="" type="checkbox"/>
	$1/3 = \text{one third}$ <input type="checkbox"/>
	$1/4 = \text{one quarter}$ <input type="checkbox"/>
	$1/2 = \text{half}$ <input checked="" type="checkbox"/>
	$1/3 = \text{one third}$ <input type="checkbox"/>
	$1/4 = \text{one quarter}$ <input type="checkbox"/>
	$1/2 = \text{half}$ <input type="checkbox"/>
	$1/3 = \text{one third}$ <input checked="" type="checkbox"/>
	$1/4 = \text{one quarter}$ <input type="checkbox"/>