

Name: _____

Date: _____


Teacher: _____

Class: _____

Geometry


Identify each shape by marking the name that best describes it:

1)



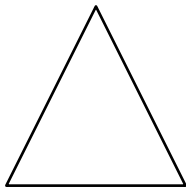
- A. Triangle
- B. Hexagon
- C. Square
- D. Circle

2)




- A. Square
- B. Rectangle
- C. Rhombus
- D. Circle

3)



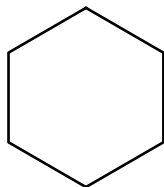
- A. Rectangle
- B. Circle
- C. Square
- D. Triangle

4)



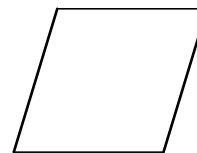
- A. Rhombus
- B. Rectangle
- C. Circle
- D. Square

5)



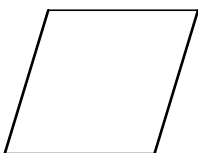
- A. Rectangle
- B. Triangle
- C. Rhombus
- D. Hexagon

6)




- A. Hexagon
- B. Triangle
- C. Rhombus
- D. Rectangle

7)



- A. Hexagon
- B. Rhombus
- C. Circle
- D. Square

8)



- A. Rhombus
- B. Rectangle
- C. Circle
- D. Hexagon

Name: _____

Date: _____

Teacher: _____


Class: _____

Geometry

Answers

Identify each shape by marking the name that best describes it:

1)




- A. Triangle
- B. Hexagon

C. Square

D. Circle

2)



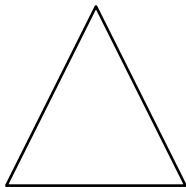
A. Square

B. Rectangle

C. Rhombus

D. Circle

3)




- A. Rectangle
- B. Circle

C. Square

D. Triangle

4)



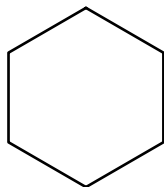
A. Rhombus

B. Rectangle

C. Circle

D. Square

5)

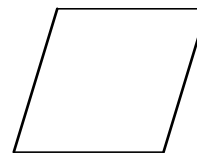


- A. Rectangle
- B. Triangle

C. Rhombus

D. Hexagon

6)



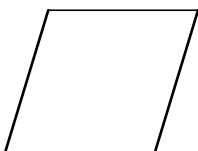
A. Hexagon

B. Triangle

C. Rhombus

D. Rectangle

7)




A. Hexagon

B. Rhombus

C. Circle

D. Square

8)



A. Rhombus

B. Rectangle

C. Circle

D. Hexagon