

Addition Exercises










Name : Class :

Score :

Objective: Get familiar with adding exercises



Sum up these objects and fill in the correct answers in the spaces provided

	Problem	Guide	Answer
1.	$1 + 1 =$		2
2.	$1 + 2 =$		
3.	$1 + 3 =$		
4.	$1 + 4 =$		
5.	$1 + 5 =$		
6.	$1 + 6 =$		
7.	$1 + 7 =$		
8.	$1 + 8 =$		
9.	$1 + 9 =$		

Total

Remarks :